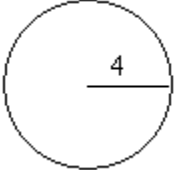
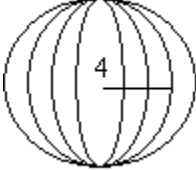
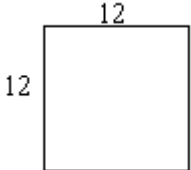
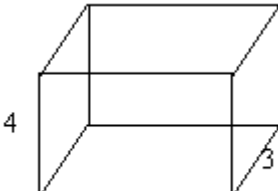
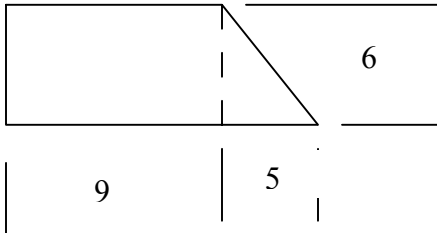
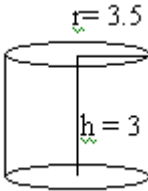
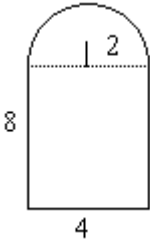
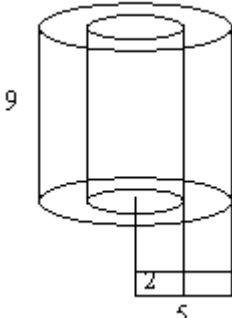




Find the area

Find the Volume

 <p style="text-align: center;">A = _____</p>	 <p style="text-align: center;">V = _____</p>
 <p style="text-align: center;">A = _____</p>	 <p style="text-align: center;">V = _____</p>
 <p style="text-align: center;">A = _____</p>	 <p style="text-align: center;">V = _____</p>
 <p style="text-align: center;">A = _____</p>	<p>What is the volume of the outer ring?</p>  <p style="text-align: center;">V = _____</p>